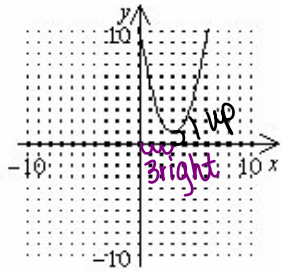


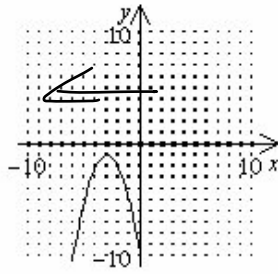
AM Objective #9: Use Rigid and Non-Rigid Transformations to Graph Functions

1. Graph: $y = (x - 3)^2 + 1$

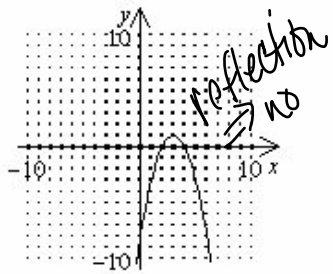
[A]



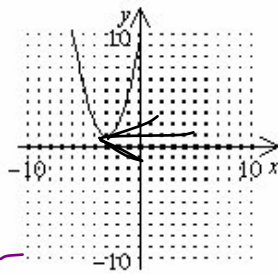
~~[B]~~



~~[C]~~



~~[D]~~



$$y = (x - 3)^2 + 1$$

↓ shift 3 units right
↘ shift 1 unit up